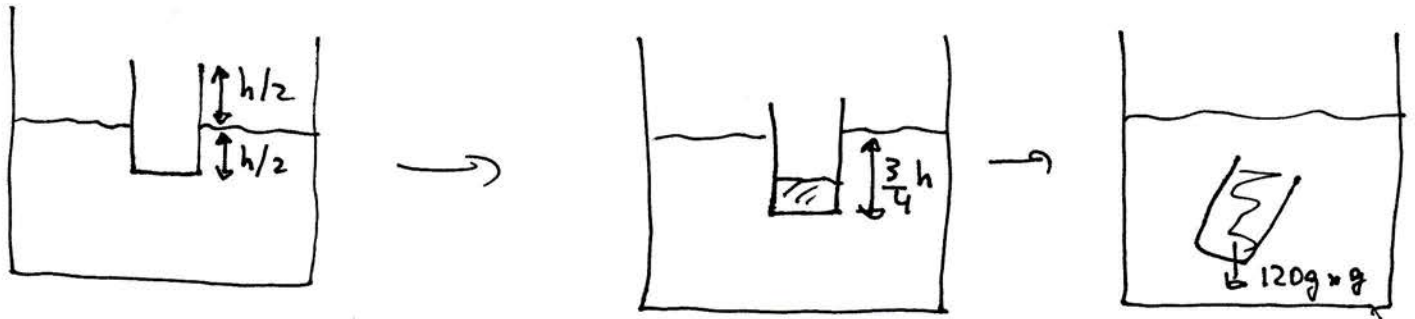


Problem 1 $h = 15 \text{ cm} = \text{height of glass}$ (a) Let $A =$ cross-section of the glass, $m =$ its mass

$$\text{Initially, } mg = \rho_{\text{H}_2\text{O}} \cdot A \cdot \frac{h}{2} \cdot g \Rightarrow \frac{3}{2} m = \frac{3}{2} \rho_{\text{H}_2\text{O}} A \cdot \frac{3}{4} h$$

$$\text{then, } m + 100g = \rho_{\text{H}_2\text{O}} \cdot A \cdot \frac{3}{4} h$$

$$\Rightarrow m + 100g = \frac{3}{2} m \Rightarrow \boxed{m = 200g} \text{ mass of the glass}$$

$$(b) \quad A = \frac{2m}{h \cdot \rho_{\text{H}_2\text{O}}} = \frac{400g}{15g/\text{cm}^2} = \frac{400}{15} \text{ cm}^2 = \pi r^2 \Rightarrow \boxed{r = 2.9 \text{ cm}}$$

(c) The total volume of the glass including the air in it

$$V = A \cdot h = \frac{2m}{\rho_{\text{H}_2\text{O}}} = 400 \text{ cm}^3$$

If V_{glass} is the volume occupied by the glass walls of the glass, the buoyant force when the glass is full of water is

$$F_B = \rho_{\text{H}_2\text{O}} \cdot V_{\text{glass}} \cdot g = (200g - 120g)g \Rightarrow$$

$$\Rightarrow V_{\text{glass}} = \frac{80g}{\rho_{\text{H}_2\text{O}}} = \boxed{80 \text{ cm}^3} \text{ So the volume of water}$$

$$\text{to fill the glass is } \boxed{V_{\text{H}_2\text{O}} = 400 \text{ cm}^3 - 80 \text{ cm}^3 = 320 \text{ cm}^3}$$

(d) The density of the glass is

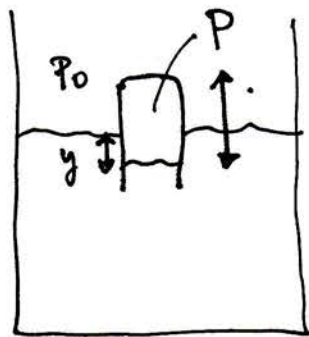
$$\rho_{\text{glass}} = \frac{200 \text{ g}}{80 \text{ cm}^3} = \boxed{2.5 \text{ g/cm}^3}$$

(e) If d is the average thickness of the glass:

$$V_{\text{glass}} = 2\pi r \cdot h \cdot d + \pi r^2 \cdot d = d(2\pi r h + \pi r^2)$$

$$\Rightarrow d = \frac{V_{\text{glass}}}{\pi r(2h+r)} = \frac{80 \text{ cm}^3}{\pi \cdot 2.9 \text{ cm}(20.8 \text{ cm})} = \boxed{4 \text{ mm}}$$

(8) If we put glass upside down:



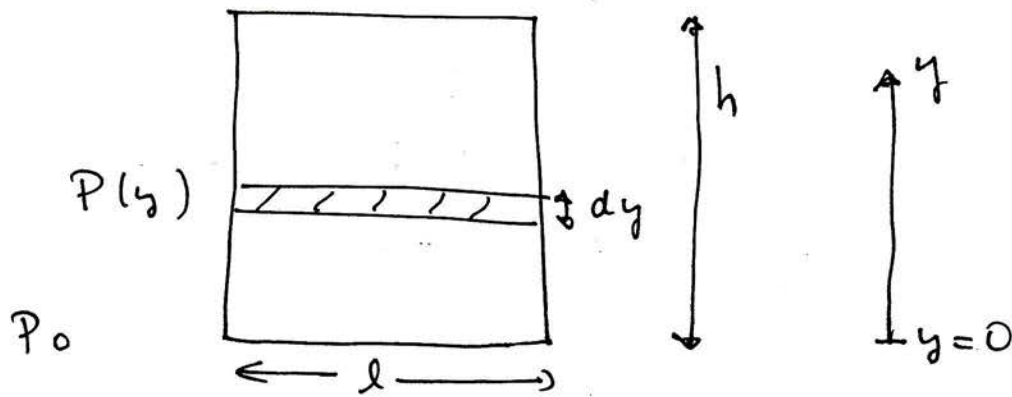
Some water gets in, air gets compressed,
 $P = P_0 + \rho g y > P_0 \implies$

buoyant force is smaller, so the glass

is **more submerged** than when it

was upright.

Problem 2



$$(a) F_0 = P_0 l h = 1.013 \times 10^5 \times 10 \times 100 \text{ N} = \boxed{1.013 \times 10^8 \text{ N}}$$

$$\text{so } \boxed{F_0 = P_0 l h = 1.013 \times 10^8 \text{ N}}$$

$$(b) P(y) = P_0 e^{-(\rho_0 g / P_0) y} = P_0 e^{-y/y_0}$$

$$y_0 = \frac{P_0}{\rho_0 g} = \frac{1.013 \times 10^5}{1.29 \times 980} \text{ m} = \boxed{8013 \text{ m}}$$

$$dF = P(y) l dy = P_0 l e^{-y/y_0} \Rightarrow$$

$$\Rightarrow F = l \int_0^h P(y) dy = P_0 l \int_0^h dy e^{-y/y_0} = P_0 l y_0 (1 - e^{-h/y_0})$$

$$1 - e^{-h/y_0} = 1 - e^{-100/8013} = 0.0124$$

$$F = P_0 l y_0 \times 0.0124 = P_0 l h \times \frac{y_0}{h} \times 0.0124 = 1.00653 \times 10^8 \text{ N}$$

$$\boxed{F - F_0 = -647,104 \text{ N}}$$

$$(c) \text{ Using Taylor: } 1 - e^{-h/y_0} = 1 - \left(1 - \frac{h}{y_0} + \frac{1}{2} \frac{h^2}{y_0^2}\right) = \frac{h}{y_0} - \frac{1}{2} \frac{h^2}{y_0^2}$$

$$F = P_0 l y_0 \left(\frac{h}{y_0} - \frac{1}{2} \frac{h^2}{y_0^2}\right) = P_0 l h \left(1 - \frac{h}{2y_0}\right) \Rightarrow \boxed{F - F_0 = -F_0 \cdot \frac{h}{2y_0} = -632,097 \text{ N}}$$

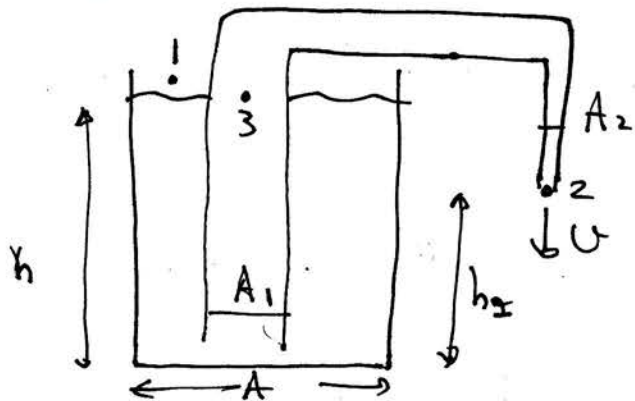
Alternatively, expand $P(y)$ using Taylor

$$P(y) = P_0 e^{-y/y_0} = P_0 \left(1 - \frac{y}{y_0}\right)$$

$$F = l \int_0^h P(y) dy = l P_0 h - \frac{l P_0}{y_0} \int_0^h y dy =$$

$$= l P_0 h - \frac{l P_0}{y_0} \frac{h^2}{2} = \boxed{P_0 l h \left(1 - \frac{h}{2y_0}\right)} \quad \text{same answer}$$

Problem 3



$$A = 3 \text{ m}^2$$

$$h = 10 \text{ m}$$

$$h_2 = 6 \text{ m}$$

$$A_2 = 5 \text{ cm}^2, A_1 = 10 \text{ cm}^2$$

$$P + \rho g y + \frac{1}{2} \rho U^2 = \text{const.} \quad \text{Bernoulli eq.}$$

(a) Using B. eq. in points 1 and 2

$$P_0 + \rho \cdot g \cdot 10 \text{ m} = P_0 + \rho \cdot g \cdot 6 \text{ m} + \frac{1}{2} \rho U^2 \Rightarrow$$

$$\Rightarrow U = \sqrt{2g \times 4 \text{ m}} = 8.85 \text{ m/s}$$

(b) Using B. eq. in points 1 and 3

$$P_0 = P_3 + \frac{1}{2} \rho U_3^2 \Rightarrow P_3 = P_0 - \frac{1}{2} \rho U_3^2$$

By continuity: $A_1 U_3 = A_2 \cdot U \Rightarrow U_3 = \frac{A_2}{A_1} U = 4.43 \text{ m/s}$

$$P_3 = 1.013 \times 10^5 \text{ Pa} - \frac{1}{2} \times 1000 \times 4.43^2 \text{ Pa} = 9.15 \times 10^4 \text{ Pa}$$

(c) The mass flow rate through 2 is:

$$\frac{dm}{dt} = \rho \cdot A_2 \cdot U \Rightarrow m = \rho \cdot A_2 \cdot U \cdot t \quad (\text{ignoring changes in } U)$$

Total mass that flows out before stopping: $m = A \cdot 4 \text{ m} \cdot \rho = 12,000 \text{ kg}$

$$t = \frac{m}{\rho A_2 U} = \frac{12,000}{1000 \times 5 \times 10^{-4} \times 8.85} \quad s = 2712 \text{ s} = 45 \text{ minutes}$$

Exact answer: take into account that v gets smaller as height drops:

$$v = \sqrt{2g(4-y)} \quad y = \text{how much height drops}$$

$$dt = \frac{dm}{\rho A_2 \sqrt{2g(4-y)}} \quad ; \quad dm = \rho \cdot A \cdot dy, \quad A = 3\text{m}^2$$

$$\Rightarrow dt = \frac{A}{A_2} \frac{dy}{\sqrt{2g(4-y)}} = \frac{A}{A_2 \sqrt{2g}} \frac{dy}{\sqrt{4-y}} \Rightarrow$$

$$t = \frac{A}{A_2 \sqrt{2g}} \left(-2\sqrt{4-y} \right) \Big|_0^4 = \frac{4A}{A_2 \sqrt{2g}} = 5424\text{s} = \boxed{90 \text{ minutes}}$$